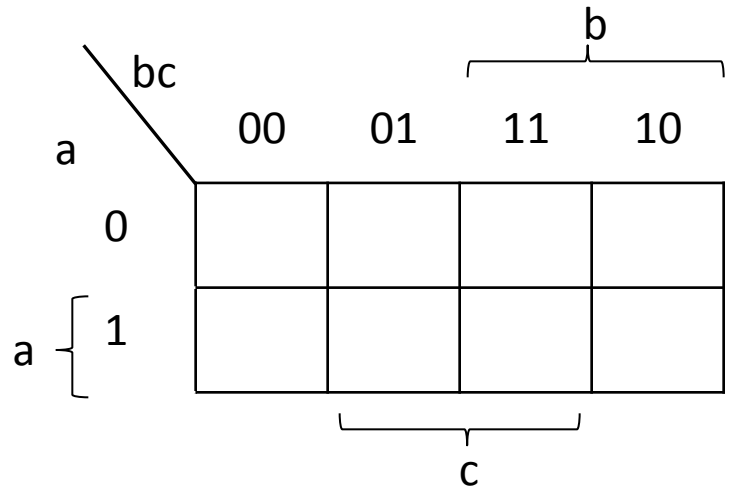


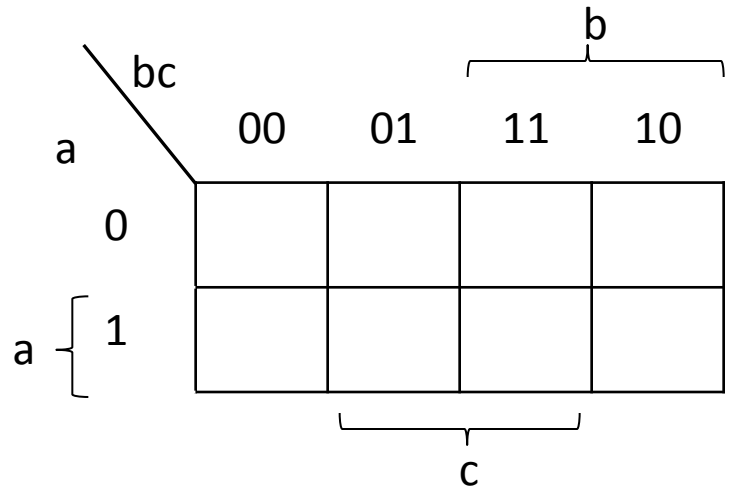
1a. Given this truth table, fill in the Karnaugh map and then find the sum-of-products expression.

a	b	c	F(a,b,c)
0	0	0	1
0	0	1	0
0	1	0	1
0	1	1	1
1	0	0	1
1	0	1	0
1	1	0	0
1	1	1	0



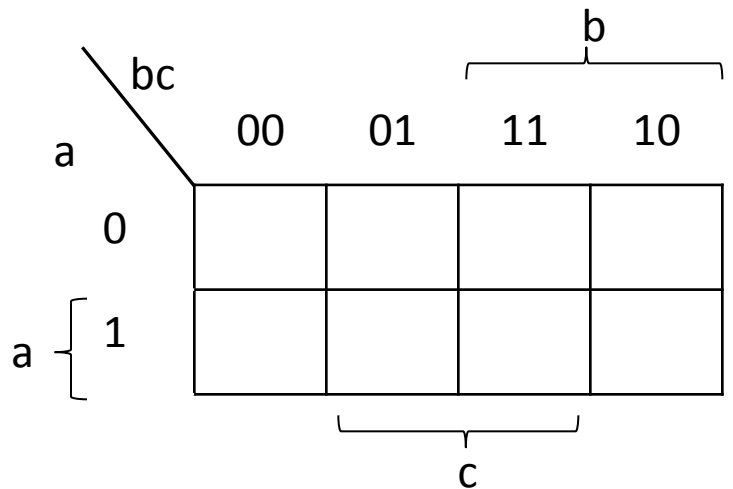
1b. Given this truth table, fill in the Karnaugh map and then find the sum-of-products expression.

a	b	c	F(a,b,c)
0	0	0	0
0	0	1	0
0	1	0	0
0	1	1	1
1	0	0	1
1	0	1	0
1	1	0	1
1	1	1	1



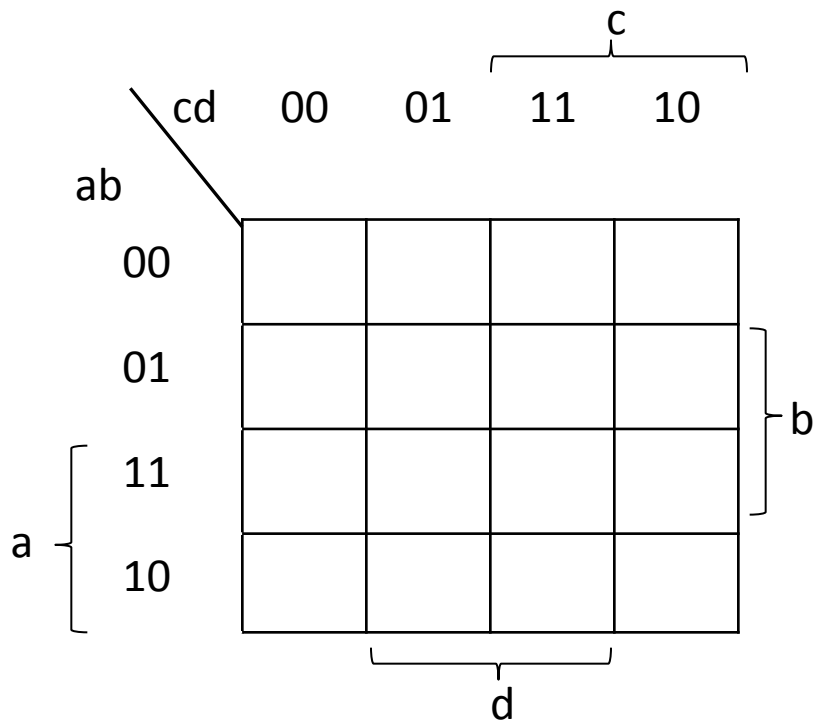
1c. Given a 3-bit number $X=abc$ in two's complement find the minimum SOP expression for $ABS(a,b,c) \geq 2$.

a	b	c	F(a,b,c)
0	0	0	
0	0	1	
0	1	0	
0	1	1	
1	0	0	
1	0	1	
1	1	0	
1	1	1	



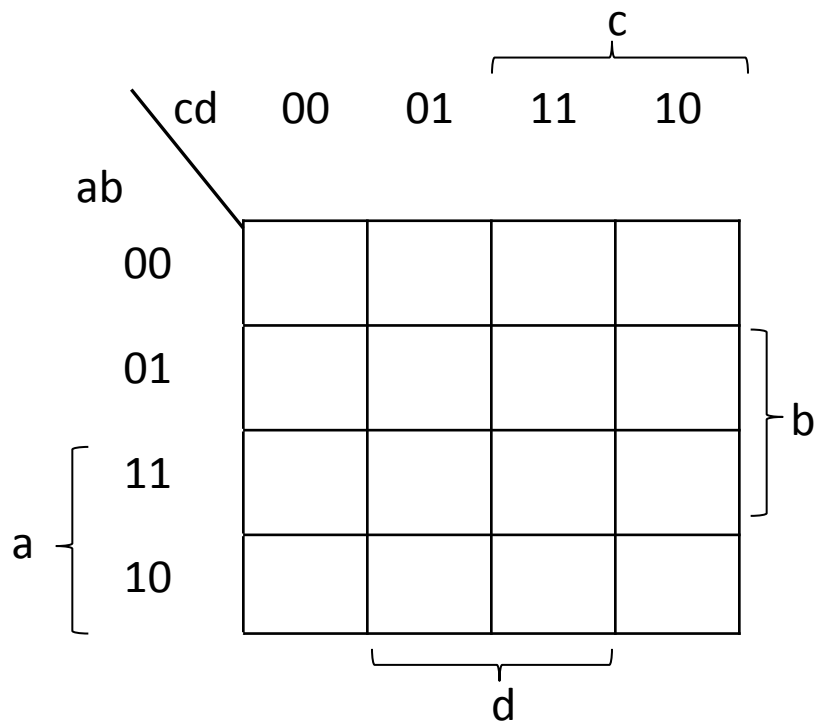
2. Given this truth table, fill in the Karnaugh map and then find the sum-of-products expression.

a	b	c	d	F(a,b,c,d)
0	0	0	0	1
0	0	0	1	0
0	0	1	0	1
0	0	1	1	0
0	1	0	0	0
0	1	0	1	1
0	1	1	0	0
0	1	1	1	0
1	0	0	0	1
1	0	0	1	0
1	0	1	0	1
1	0	1	1	0
1	1	0	0	0
1	1	0	1	1
1	1	1	0	0
1	1	1	1	1



3. Given two 2-bit non-negative numbers $X=ab$ and $Y=cd$, find the minimum sum-of-products expression for the Boolean function returning true if and only if $X > Y$.

a	b	c	d	F(a,b,c,d)
0	0	0	0	
0	0	0	1	
0	0	1	0	
0	0	1	1	
0	1	0	0	
0	1	0	1	
0	1	1	0	
0	1	1	1	
1	0	0	0	
1	0	0	1	
1	0	1	0	
1	0	1	1	
1	1	0	0	
1	1	0	1	
1	1	1	0	
1	1	1	1	



4. Given a 4-bit number in two's complement, find the Boolean expression for all numbers whose absolute value is strictly less than 3 or strictly greater than 6.

a	b	c	d	F(a,b,c,d)
0	0	0	0	
0	0	0	1	
0	0	1	0	
0	0	1	1	
0	1	0	0	
0	1	0	1	
0	1	1	0	
0	1	1	1	
1	0	0	0	
1	0	0	1	
1	0	1	0	
1	0	1	1	
1	1	0	0	
1	1	0	1	
1	1	1	0	
1	1	1	1	

